

Name: \_\_\_\_\_

Date: \_\_\_\_\_

# Identify Polygons

Identify the polygons.


1.




2.



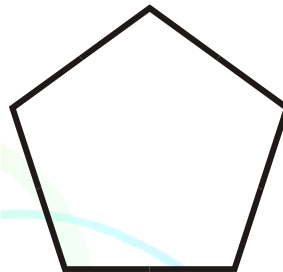
3.



4.



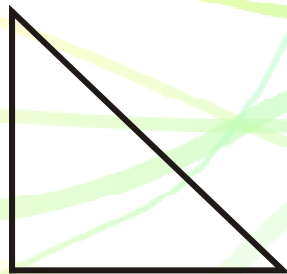
5.



6.



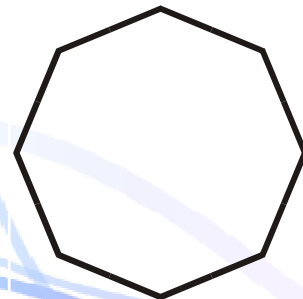
7.



8.



9.



Name: \_\_\_\_\_

Date: \_\_\_\_\_

# Identify Polygons

Identify the polygons.

1.




Trapezoid

2.




Parallelogram

3.



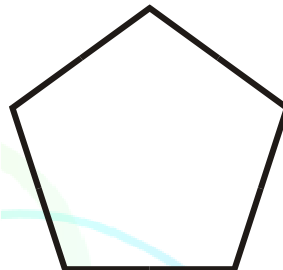
Square

4.



Rhombus

5.




Regular Pentagon

6.



Rectangle

7.



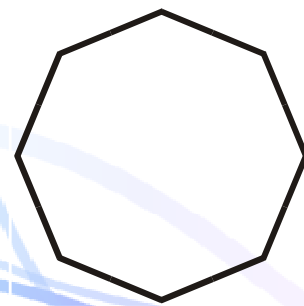
Right Triangle

8.



Scalene Triangle

9.



Regular Octagon