

Name: _____


Date: _____

Count Objects Up to 50


Count how many.


1.  =


2.  =


3.  =


4.  =


5.  =

6.  =

7.  =

8.  =

9.  =

10.  =

11.  =

12.  =

Name: _____


Date: _____

Count Objects Up to 50


Count how many.


1.  =


2.  =


3.  =


4.  =


5.  =

6.  =

7.  =

8.  =

9.  =

10.  =

11.  =

12.  =