


Name: \_\_\_\_\_

Date: \_\_\_\_\_

# Match Digital To Analogue Clock


Show the time for each clock.

1.




5:10

2.




5:00

3.




11:40

4.




7:20

5.



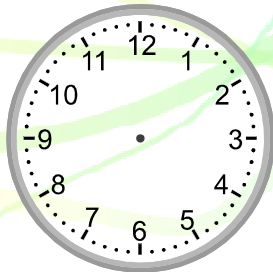
5:30

6.




10:20

7.



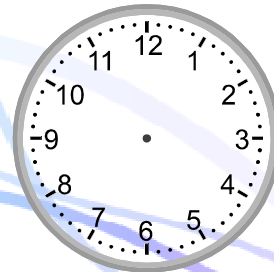
3:00

8.



9:00

9.




6:40

Name: \_\_\_\_\_


Date: \_\_\_\_\_

10.




4:10

11.




3:20

12.




11:50

13.




8:10

14.




11:20

15.




4:40

16.




4:50

17.



9:20

18.



12:00


Name: \_\_\_\_\_

Date: \_\_\_\_\_

# Match Digital To Analogue Clock


Show the time for each clock.

1.



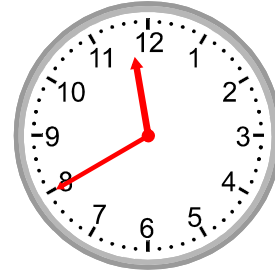
5:10

2.



5:00

3.



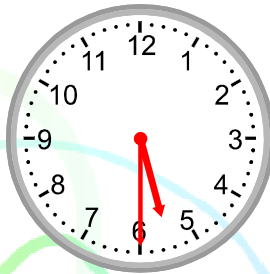
11:40

4.



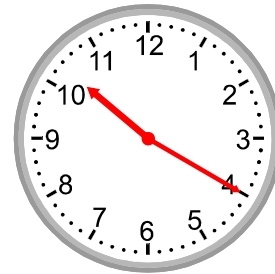
7:20

5.



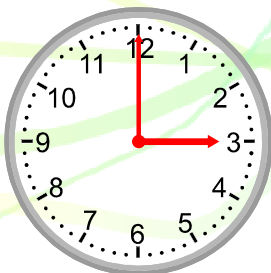
5:30

6.



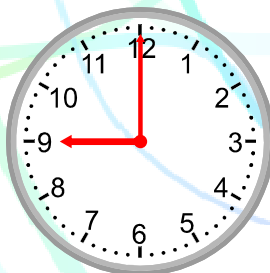
10:20

7.



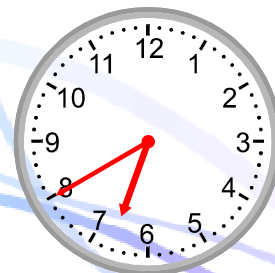
3:00

8.



9:00

9.

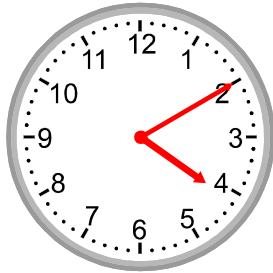


6:40

Name:

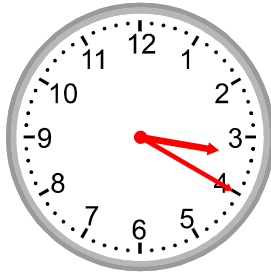
Date:

10.




4:10

11.



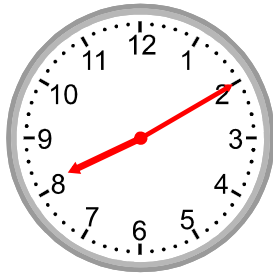
3:20

12.



11:50

13.




8:10

14.



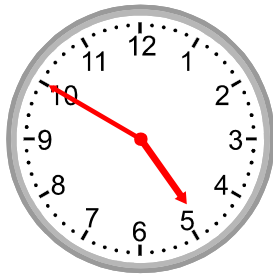
11:20

15.



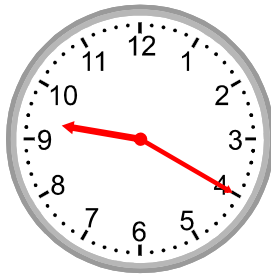
4:40

16.



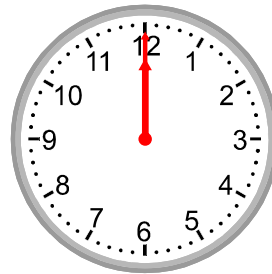
4:50

17.



9:20

18.



12:00