

Name: _____

Date: _____

Class: _____


Teacher: _____



Time


Draw the clock hands to show the passage of time.

1.




What time will it be in 1 hour 4 minutes?

2.




What time will it be in 2 hours 15 minutes?

3.




What time will it be in 2 hours 45 minutes?

4.




What time will it be in 1 hour 45 minutes?

5.



What time will it be in 2 hours 53 minutes?

6.



What time will it be in 4 hours 35 minutes?

Name: _____

Date: _____

Class: _____


Teacher: _____



Time


Draw the clock hands to show the passage of time.

1.




What time will it be in 1 hour 4 minutes?

2.




What time will it be in 2 hours 15 minutes?

3.




What time will it be in 2 hours 45 minutes?

4.



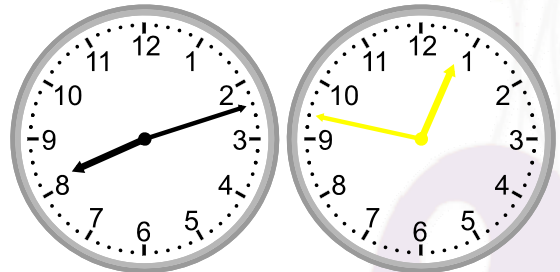
What time will it be in 1 hour 45 minutes?

5.



What time will it be in 2 hours 53 minutes?

6.



What time will it be in 4 hours 35 minutes?